
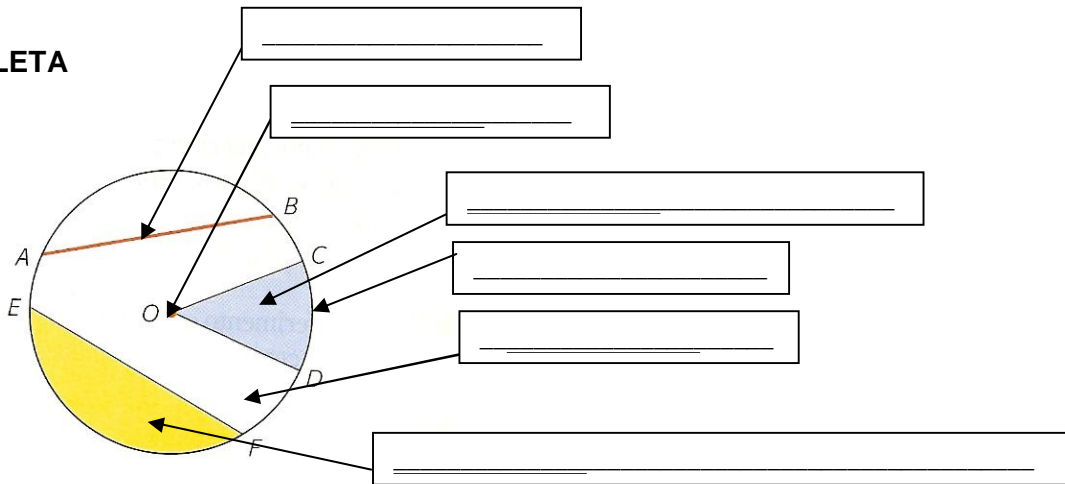




A) COMPLETA





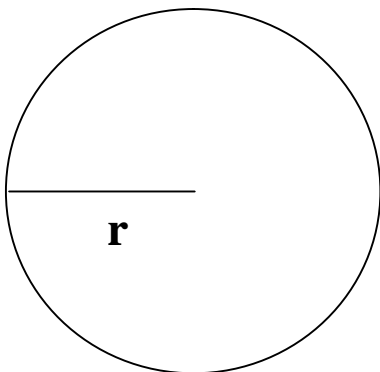




B) DISEGNA

- una circonferenza di raggio = 3 cm e una corda di 5 cm
- una corona circolare

C) RISOLVI



$r = 7,5 \text{ cm}$ diametro = _____
C = _____
A = _____

$r =$ _____ diametro = 16 cm
C = _____

$r =$ _____ diametro = _____
C = $84\pi \text{ cm}$ **A** = _____